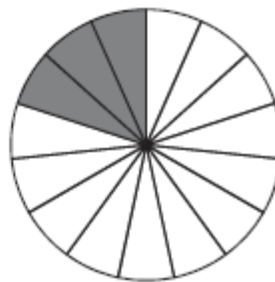
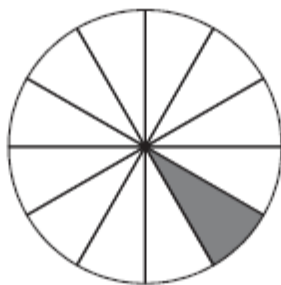
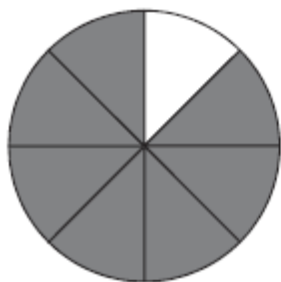
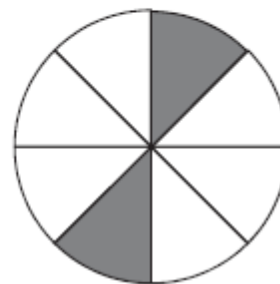
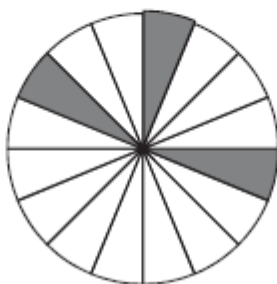
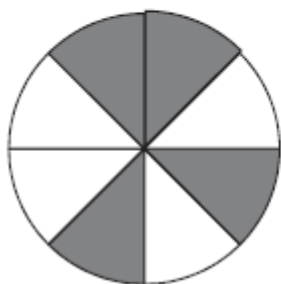



26. Zapiš, jaká část obrazce je vybarvena:









27. Zapiš desetinné zlomky desetinným číslem:

vzor: $\frac{42}{10} = 4,2$

$\frac{21}{1000} = 0,021$

a) $\frac{147}{100} =$

d) $\frac{47}{100} =$

b) $\frac{3}{100} =$

e) $\frac{57}{100} =$

c) $\frac{3217}{100} =$

f) $\frac{81}{100} =$

28. Zapiš desetinné číslo desetinným zlomkem:

vzor: $3,2 = \frac{32}{10}$

$0,017 = \frac{17}{1000}$

a) $4,5 =$

d) $30,0 =$

b) $3,02 =$

e) $14,2 =$

c) $0,38 =$

f) $0,0003 =$

29. Zapiš zlomek v základním tvaru:

vzor: $\frac{25}{60} = \frac{5}{12}$

a) $\frac{14}{50} =$

b) $\frac{100}{150} =$

c) $\frac{38}{57} =$